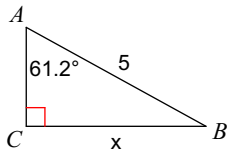


SM2a In-Class 9

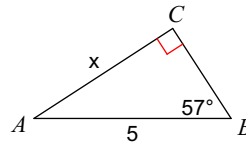
Date _____ Period _____

a) Hint: SOHCAHTOA**b) Write the equation with known and unknown values substituted in.****c) Find the measure of each side indicated. Round to the nearest tenth.**

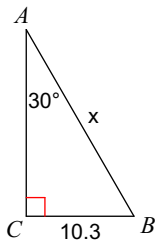
1)



2)



3)



4)

