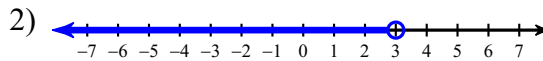
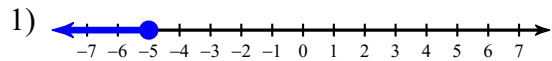


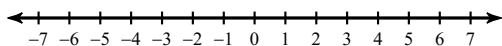
SM2-A HW #1-10 (Unit 1 Review #2)-Part 1 (Graph Inequalities)

Write an inequality for each graph.



Draw a graph for each inequality.

3) $n \geq -4$



4) $k \geq 5$

